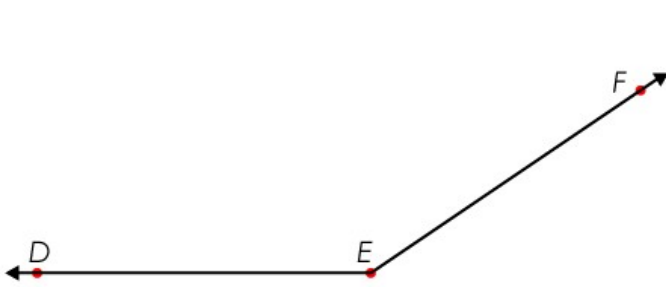


Name: _____

Measuring Angles

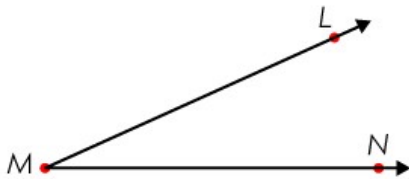
Using a protractor, measure the angles.



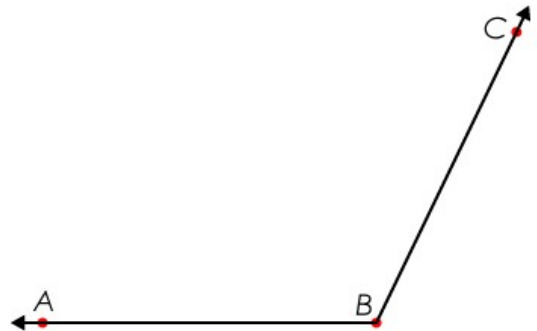
$\angle DEF =$ _____



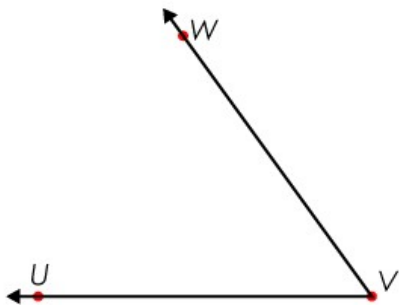
$\angle RST =$ _____



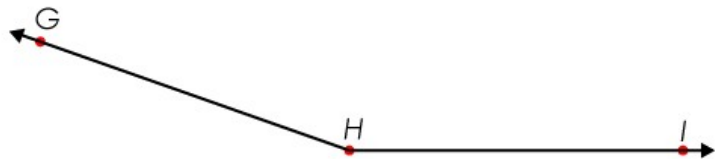
$\angle LMN =$ _____



$\angle ABC =$ _____



$\angle UVW =$ _____

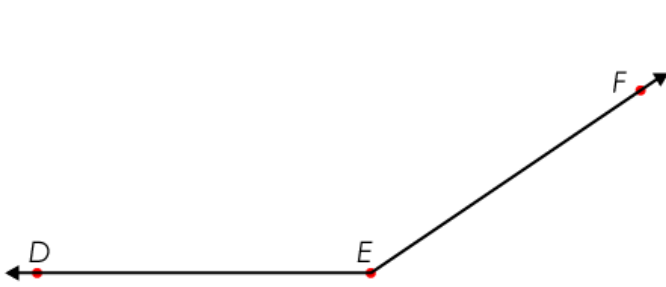


$\angle GHI =$ _____

Name: _____

Measuring Angles - **ANSWERS**

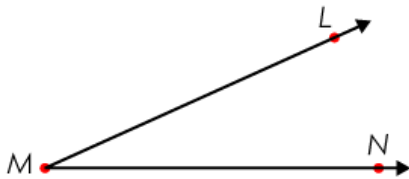
Using a protractor, measure the angles.



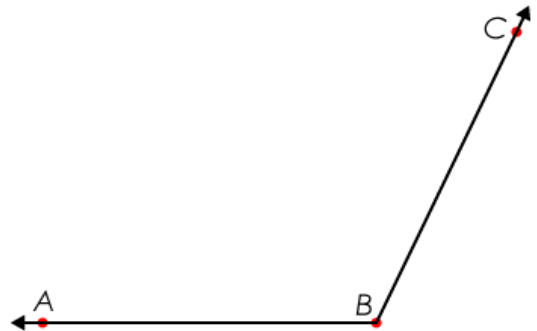
$$\angle DEF = \underline{145^\circ}$$



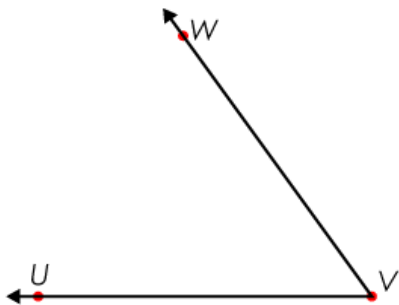
$$\angle RST = \underline{95^\circ}$$



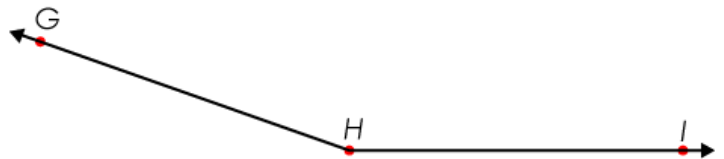
$$\angle LMN = \underline{25^\circ}$$



$$\angle ABC = \underline{115^\circ}$$



$$\angle UVW = \underline{55^\circ}$$



$$\angle GHI = \underline{160^\circ}$$